










Bryd billedkoden og indsæt de manglende tal.

								
5	1	7	3	4	9	8	6	2

$$\text{Spider} + \square = \text{Bat on moon}$$

$$\square + \text{Skull} = \text{Cat}$$

$$\text{Spider} - \square = \text{Skull}$$

$$\text{Bat} - \square = \text{Spider}$$

$$\square + \text{Pumpkin} = \text{Bat on moon}$$

$$\square - \text{Spiderweb} = \text{Skull}$$

$$\square + \text{Spiderweb} = \text{Witch on moon}$$

$$\square - \text{Bat} = \text{Spider}$$










$$\square - \text{Spiderweb} = \text{Spider}$$

$$\text{Skull} + \square = \text{Spiderweb}$$

$$\square + \text{Skull} = \text{Spiderweb}$$

$$\text{Witch on moon} - \square = \text{Spider}$$

Bryd billedkoden og indsæt de manglende tal.

								
5	1	7	3	4	9	8	6	2

$$\text{Spider} + \boxed{4} = \text{Bat on moon}$$

$$\boxed{7} + \text{Skull} = \text{Cat}$$

$$\text{Spider} - \boxed{2} = \text{Skull}$$

$$\text{Bat} - \boxed{3} = \text{Spider}$$

$$\boxed{5} + \text{Pumpkin} = \text{Bat on moon}$$

$$\boxed{5} - \text{Spiderweb} = \text{Skull}$$

$$\boxed{1} + \text{Spiderweb} = \text{Witch on moon}$$

$$\boxed{9} - \text{Bat} = \text{Spider}$$

$$\boxed{7} - \text{Spiderweb} = \text{Spider}$$

$$\text{Skull} + \boxed{3} = \text{Spiderweb}$$

$$\boxed{3} + \text{Skull} = \text{Spiderweb}$$

$$\text{Witch on moon} - \boxed{2} = \text{Spider}$$