










Bryd billedkoden og indsæt de manglende tal.

								
7	1	6	2	8	5	4	9	3

$$\square + \text{bat} = \text{cat}$$

$$\text{pumpkin} + \square = \text{ghost}$$

$$\square + \text{cat} = \text{ghost}$$

$$\square - \text{bat on cross} = \text{pumpkin}$$

$$\text{skull} - \square = \text{spiderweb}$$

$$\text{skull} - \square = \text{moon with bat}$$

$$\text{pumpkin} - \square = \text{spiderweb}$$

$$\text{bat} + \square = \text{bat on cross}$$










$$\square + \text{spiderweb} = \text{pumpkin}$$

$$\square - \text{spider} = \text{spiderweb}$$

$$\text{spider} + \square = \text{skull}$$

$$\text{ghost} - \square = \text{moon with bat}$$

Bryd billedkoden og indsæt de manglende tal.

								
7	1	6	2	8	5	4	9	3

$$\boxed{7} + \text{bat} = \text{cat}$$

$$\text{pumpkin} + \boxed{4} = \text{ghost}$$

$$\boxed{1} + \text{cat} = \text{ghost}$$

$$\boxed{9} - \text{bat on cross} = \text{pumpkin}$$

$$\text{skull} - \boxed{5} = \text{spiderweb}$$

$$\text{skull} - \boxed{1} = \text{moon with bat}$$

$$\text{pumpkin} - \boxed{3} = \text{spiderweb}$$

$$\text{bat} + \boxed{3} = \text{bat on cross}$$

$$\boxed{3} + \text{spiderweb} = \text{pumpkin}$$

$$\boxed{5} - \text{spider} = \text{spiderweb}$$

$$\text{spider} + \boxed{4} = \text{skull}$$

$$\text{ghost} - \boxed{3} = \text{moon with bat}$$