










Bryd billedkoden og indsæt de manglende tal.

								
9	5	8	1	2	3	7	4	6

$$\square - \text{Witch} = \text{Bat}$$

$$\square + \text{Witch} = \text{Bat}$$

$$\square - \text{Skull} = \text{Bat}$$

$$\text{Cat} - \square = \text{Bat}$$

$$\square + \text{Bat} = \text{Cat}$$

$$\square + \text{Ghost} = \text{Cat}$$

$$\square + \text{Pumpkin} = \text{Spider}$$

$$\square + \text{Bat} = \text{Cat}$$










$$\square - \text{Witch} = \text{Bat}$$

$$\square - \text{Ghost} = \text{Witch}$$

$$\square + \text{Spider} = \text{Cat}$$

$$\text{Spiderweb} - \square = \text{Bat}$$

Bryd billedkoden og indsæt de manglende tal.

								
9	5	8	1	2	3	7	4	6

$$\boxed{3} - \text{Witch} = \text{Bat}$$

$$\boxed{1} + \text{Witch} = \text{Bat}$$

$$\boxed{7} - \text{Skull} = \text{Bat}$$

$$\text{Cat} - \boxed{5} = \text{Bat}$$

$$\boxed{7} + \text{Bat} = \text{Cat}$$

$$\boxed{3} + \text{Ghost} = \text{Cat}$$

$$\boxed{3} + \text{Pumpkin} = \text{Spider}$$

$$\boxed{5} + \text{Bat} = \text{Cat}$$

$$\boxed{3} - \text{Witch} = \text{Bat}$$

$$\boxed{7} - \text{Ghost} = \text{Witch}$$

$$\boxed{1} + \text{Spider} = \text{Cat}$$

$$\text{Spiderweb} - \boxed{8} = \text{Bat}$$