










Bryd billedkoden og indsæt de manglende tal.

								
5	8	6	4	3	7	2	9	1

$$\text{Cat} - \square = \text{Skull}$$

$$\square - \text{Skull} = \text{Pumpkin}$$

$$\text{Bat} - \square = \text{Moon with bat}$$

$$\text{Bat} + \square = \text{Witch}$$

$$\square - \text{Pumpkin} = \text{Spiderweb}$$

$$\text{Spider} + \square = \text{Bat}$$

$$\square + \text{Spiderweb} = \text{Pumpkin}$$

$$\square + \text{Spider} = \text{Cat}$$










$$\square - \text{Spider} = \text{Moon with bat}$$

$$\text{Spiderweb} + \square = \text{Spider}$$

$$\square - \text{Pumpkin} = \text{Skull}$$

$$\text{Spiderweb} + \square = \text{Spider}$$

Bryd billedkoden og indsæt de manglende tal.

								
5	8	6	4	3	7	2	9	1

$$\text{Cat} - \boxed{3} = \text{Skull}$$

$$\boxed{9} - \text{Skull} = \text{Pumpkin}$$

$$\text{Bat} - \boxed{5} = \text{Moon with bat}$$

$$\text{Bat} + \boxed{2} = \text{Witch}$$

$$\boxed{5} - \text{Pumpkin} = \text{Spiderweb}$$

$$\text{Spider} + \boxed{4} = \text{Bat}$$

$$\boxed{3} + \text{Spiderweb} = \text{Pumpkin}$$

$$\boxed{5} + \text{Spider} = \text{Cat}$$

$$\boxed{5} - \text{Spider} = \text{Moon with bat}$$

$$\text{Spiderweb} + \boxed{2} = \text{Spider}$$

$$\boxed{9} - \text{Pumpkin} = \text{Skull}$$

$$\text{Spiderweb} + \boxed{2} = \text{Spider}$$