










Bryd billedkoden og løs regnestykkerne.

								
4	7	1	5	9	8	2	3	6

$$\text{Yellow star} + \text{Yellow bells} = \square$$

$$\text{Yellow star} + \text{Santa Claus} = \square$$

$$\text{Green Christmas tree} + \text{Yellow star} = \square$$

$$\text{White snowflake} + \text{Red and white heart} = \square$$

$$\text{Yellow bells} + \text{Yellow bells} = \square$$

$$\text{Red and white heart} + \text{Yellow bells} = \square$$

$$\text{Santa Claus} + \text{Yellow bells} = \square$$

$$\text{Yellow bells} + \text{White snowflake} = \square$$










$$\text{Gift} + \text{Red and white heart} = \square$$

$$\text{Gift} + \text{Gift} = \square$$

$$\text{Red and white heart} + \text{White snowflake} = \square$$

$$\text{Angel} + \text{Yellow star} = \square$$

Bryd billedkoden og løs regnestykkerne.

								
4	7	1	5	9	8	2	3	6

$$\text{Yellow star} + \text{Yellow bells} = \boxed{3}$$

$$\text{Yellow star} + \text{Santa Claus} = \boxed{7}$$

$$\text{Christmas tree} + \text{Yellow star} = \boxed{9}$$

$$\text{Snowflake} + \text{Red and white heart} = \boxed{8}$$

$$\text{Yellow bells} + \text{Yellow bells} = \boxed{4}$$

$$\text{Red and white heart} + \text{Yellow bells} = \boxed{5}$$

$$\text{Santa Claus} + \text{Yellow bells} = \boxed{8}$$

$$\text{Yellow bells} + \text{Snowflake} = \boxed{7}$$

$$\text{Gift} + \text{Red and white heart} = \boxed{7}$$

$$\text{Gift} + \text{Gift} = \boxed{8}$$

$$\text{Red and white heart} + \text{Snowflake} = \boxed{8}$$

$$\text{Angel} + \text{Yellow star} = \boxed{8}$$