










Bryd billedkoden og løs regnestykkerne.

								
2	5	9	6	7	3	8	4	1

$$\text{Santa Claus} + \text{Snowflake} = \square$$

$$\text{Snowflake} + \text{Snowflake} = \square$$

$$\text{Yellow star} + \text{Red and white heart} = \square$$

$$\text{Christmas tree} + \text{Mary and baby} = \square$$

$$\text{Snowflake} + \text{Snowflake} = \square$$

$$\text{Snowflake} + \text{Snowflake} = \square$$

$$\text{Yellow star} + \text{Snowflake} = \square$$

$$\text{Angel} + \text{Yellow bells} = \square$$










$$\text{Mary and baby} + \text{Mary and baby} = \square$$

$$\text{Santa Claus} + \text{Yellow bells} = \square$$

$$\text{Mary and baby} + \text{Yellow star} = \square$$

$$\text{Red and white heart} + \text{Christmas tree} = \square$$

Bryd billedkoden og løs regnestykkerne.

								
2	5	9	6	7	3	8	4	1

$$\text{Santa Claus} + \text{Two Snowflakes} = 5$$

$$\text{Snowflake} + \text{Two Snowflakes} = 8$$

$$\text{Yellow Star} + \text{Checkered Heart} = 11$$

$$\text{Christmas Tree} + \text{Virgin Mary} = 6$$

$$\text{Two Snowflakes} + \text{Two Snowflakes} = 4$$

$$\text{Two Snowflakes} + \text{Two Snowflakes} = 4$$

$$\text{Yellow Star} + \text{Two Snowflakes} = 6$$

$$\text{Angel} + \text{Two Bells} = 17$$

$$\text{Virgin Mary} + \text{Virgin Mary} = 2$$

$$\text{Santa Claus} + \text{Two Bells} = 12$$

$$\text{Virgin Mary} + \text{Yellow Star} = 5$$

$$\text{Checkered Heart} + \text{Christmas Tree} = 12$$