




Bryd billedkoden og løs regnestykkerne.

								
3	4	6	8	1	9	7	5	2

$$\text{Danish heart} + \text{Angel} = \square$$

$$\text{Santa Claus} + \text{Santa Claus} = \square$$

$$\text{Snowflake} + \text{Christmas tree} = \square$$

$$\text{Santa Claus} + \text{Yellow star} = \square$$

$$\text{Yellow star} + \text{Snowflake} = \square$$

$$\text{Snowflake} + \text{Yellow star} = \square$$

$$\text{Angel} + \text{Angel} = \square$$

$$\text{Snowflake} + \text{Gift box} = \square$$

$$\text{Gift box} + \text{Santa Claus} = \square$$

$$\text{Christmas tree} + \text{Snowflake} = \square$$

$$\text{Snowflake} + \text{Snowflake} = \square$$

$$\text{Gift box} + \text{Gift box} = \square$$

Bryd billedkoden og løs regnestykkerne.

								
3	4	6	8	1	9	7	5	2

$$\text{Heart} + \text{Angel} = 12$$

$$\text{Santa Claus} + \text{Santa Claus} = 4$$

$$\text{Snowflake} + \text{Christmas Tree} = 10$$

$$\text{Santa Claus} + \text{Star} = 10$$

$$\text{Star} + \text{Snowflake} = 12$$

$$\text{Snowflake} + \text{Star} = 12$$

$$\text{Angel} + \text{Angel} = 10$$

$$\text{Snowflake} + \text{Gift Box} = 4$$

$$\text{Gift Box} + \text{Santa Claus} = 3$$

$$\text{Christmas Tree} + \text{Snowflake} = 9$$

$$\text{Snowflake} + \text{Snowflake} = 6$$

$$\text{Gift Box} + \text{Gift Box} = 2$$