










Bryd billedkoden og løs regnestykkerne.

								
2	8	6	4	1	7	9	5	3

$$\text{Snowflake} + \text{Angel} = \square$$

$$\text{Yellow bells} + \text{Snowflake} = \square$$

$$\text{Santa Claus} + \text{Gift box} = \square$$

$$\text{Angel} - \text{Gift box} = \square$$

$$\text{Angel} + \text{Angel} = \square$$

$$\text{Santa Claus} - \text{Yellow star} = \square$$

$$\text{Yellow bells} - \text{Angel} = \square$$

$$\text{Snowflake} + \text{Angel} = \square$$










$$\text{Red and white heart} - \text{Snowflake} = \square$$

$$\text{Angel} + \text{Angel} = \square$$

$$\text{Santa Claus} - \text{Yellow bells} = \square$$

$$\text{Mary and baby Jesus} - \text{Angel} = \square$$

Bryd billedkoden og løs regnestykkerne.

								
2	8	6	4	1	7	9	5	3

$$\text{Snowflake} + \text{Angel} = 4$$

$$\text{Yellow bells} + \text{Snowflake} = 9$$

$$\text{Santa Claus} + \text{Gift} = 9$$

$$\text{Angel} - \text{Gift} = 1$$

$$\text{Angel} + \text{Angel} = 6$$

$$\text{Santa Claus} - \text{Yellow star} = 1$$

$$\text{Yellow bells} - \text{Angel} = 2$$

$$\text{Snowflake} + \text{Angel} = 4$$

$$\text{Red and white heart} - \text{Snowflake} = 8$$

$$\text{Angel} + \text{Angel} = 6$$

$$\text{Santa Claus} - \text{Yellow bells} = 2$$

$$\text{Mary and baby} - \text{Angel} = 5$$