










Bryd billedkoden og løs regnestykkerne.

								
9	5	4	3	8	1	2	7	6

$$\text{Castle} + \text{Lemon} = \square$$

$$\text{Chicken} - \text{Eye} = \square$$

$$\text{Eye} + \text{Bull head} = \square$$

$$\text{Chicken} - \text{Eye} = \square$$

$$\text{Eye} + \text{Car} = \square$$

$$\text{Chicken} + \text{Lips} = \square$$

$$\text{Lemon} + \text{Car} = \square$$

$$\text{Fire} - \text{Eye} = \square$$










$$\text{Lemon} + \text{Car} = \square$$

$$\text{Car} - \text{Chicken} = \square$$

$$\text{Rocket} - \text{Eye} = \square$$

$$\text{Castle} - \text{Eye} = \square$$

Bryd billedkoden og løs regnestykkerne.

								
9	5	4	3	8	1	2	7	6

$$\text{Castle} + \text{Lemon} = 8$$

$$\text{Chicken} - \text{Eye} = 2$$

$$\text{Eye} + \text{Bull head} = 7$$

$$\text{Chicken} - \text{Eye} = 2$$

$$\text{Eye} + \text{Car} = 9$$

$$\text{Chicken} + \text{Lips} = 7$$

$$\text{Lemon} + \text{Car} = 7$$

$$\text{Fire} - \text{Eye} = 5$$

$$\text{Lemon} + \text{Car} = 7$$

$$\text{Car} - \text{Chicken} = 1$$

$$\text{Rocket} - \text{Eye} = 6$$

$$\text{Castle} - \text{Eye} = 4$$