










Bryd billedkoden og løs regnestykkerne.



								
4	2	9	5	3	8	6	7	1



 -  =



 +  =

 -  =


 -  =

 +  =



 +  =



 -  =

 -  =










 +  =

 +  =

 +  =

 -  =

Bryd billedkoden og løs regnestykkerne.

								
4	2	9	5	3	8	6	7	1

$$\text{Nose} - \text{Crown} = 1$$

$$\text{House} + \text{House} = 2$$

$$\text{Chicken} - \text{House} = 2$$

$$\text{Chicken} - \text{Rocket} = 1$$

$$\text{Hourglass} + \text{Rocket} = 9$$

$$\text{Chicken} + \text{Rose} = 7$$

$$\text{Hourglass} - \text{Chicken} = 4$$

$$\text{Crown} - \text{House} = 4$$

$$\text{Crown} + \text{Rocket} = 7$$

$$\text{House} + \text{Hourglass} = 8$$

$$\text{Chicken} + \text{Rose} = 7$$

$$\text{Eagle} - \text{Rocket} = 7$$