










Bryd billedkoden og løs regnestykkerne.

								
4	2	1	3	9	8	5	7	6

$$\text{Toothbrush} + \text{Snake} = \square$$

$$\text{Toothbrush} + \text{Bench} = \square$$

$$\text{Jester} - \text{Fire} = \square$$

$$\text{Bench} + \text{Mushroom} = \square$$

$$\text{Sun} - \text{Mushroom} = \square$$

$$\text{Bench} - \text{Toothbrush} = \square$$

$$\text{Snail} - \text{Wheat} = \square$$

$$\text{Bench} - \text{Sun} = \square$$










$$\text{Sun} + \text{Fire} = \square$$

$$\text{Sun} - \text{Mushroom} = \square$$

$$\text{Jester} + \text{Mushroom} = \square$$

$$\text{Sun} + \text{Mushroom} = \square$$

Bryd billedkoden og løs regnestykkerne.

								
4	2	1	3	9	8	5	7	6

$$\text{Toothbrush} + \text{Snake} = \boxed{9}$$

$$\text{Toothbrush} + \text{Bench} = \boxed{6}$$

$$\text{Jester} - \text{Fire} = \boxed{3}$$

$$\text{Bench} + \text{Mushroom} = \boxed{7}$$

$$\text{Sun} - \text{Mushroom} = \boxed{1}$$

$$\text{Bench} - \text{Toothbrush} = \boxed{4}$$

$$\text{Snail} - \text{Wheat} = \boxed{3}$$

$$\text{Bench} - \text{Sun} = \boxed{2}$$

$$\text{Sun} + \text{Fire} = \boxed{7}$$

$$\text{Sun} - \text{Mushroom} = \boxed{1}$$

$$\text{Jester} + \text{Mushroom} = \boxed{9}$$

$$\text{Sun} + \text{Mushroom} = \boxed{5}$$