

Se hvad klokken er under urene - tegn derefter de rigtige visere.



03:45



05:15



11:45



01:45



02:15



06:15



11:15



09:15



08:45



09:45




02:45




07:15


Se hvad klokken er under urene - tegn derefter de rigtige visere.




03:45




05:15




11:45




01:45




02:15




06:15




11:15




09:15




08:45



09:45



02:45



07:15